

PROBLEM 2

We know that equations of the form $r = \cos(k\theta)$
 $r = \sin(k\theta)$

represent flowers with k petals if k is odd
 $2k$ petals if k is even.

There is no need to draw a picture, we only need to find 2 consecutive angles θ for which $r=0$ (this is when the curve traces one petal).

1) $r = \cos(3\theta) \rightarrow 3$ petals

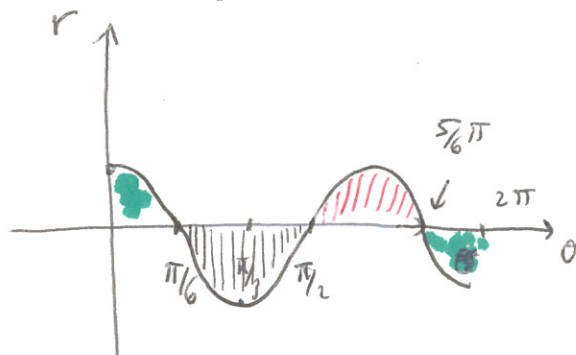
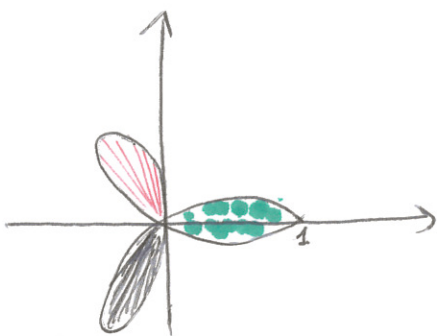
$$\cos(3\theta) = 0 \rightarrow 3\theta = \frac{\pi}{2} + m\pi \rightarrow \theta = \frac{\pi}{6} + \frac{m\pi}{3}$$

$$\rightarrow \theta = \frac{\pi}{6}, \frac{\pi}{6} + \frac{\pi}{3}, \frac{\pi}{6} + \frac{2\pi}{3}, \dots$$

So one petal is (for example) $\frac{\pi}{6} \leq \theta \leq \frac{\pi}{6} + \frac{\pi}{3} = \frac{\pi}{2}$

$$\begin{aligned} \text{Area of the petal} &= \int_{\pi/6}^{\pi/2} \frac{1}{2} r^2 d\theta = \int_{\pi/6}^{\pi/2} \frac{1}{2} \cos^2(3\theta) d\theta \\ &= \int_{\pi/6}^{\pi/2} \frac{1}{2} \frac{1 + \cos(6\theta)}{2} d\theta = \int_{\pi/6}^{\pi/2} \frac{1}{4} d\theta + \int_{\pi/6}^{\pi/2} \frac{\cos(6\theta)}{4} d\theta \\ &= \frac{1}{4} \left(\frac{\pi}{2} - \frac{\pi}{6} \right) + \frac{\sin(6\theta)}{24} \Big|_{\pi/6}^{\pi/2} = \frac{\pi}{12} \end{aligned}$$

if you want the picture (since they are cool)

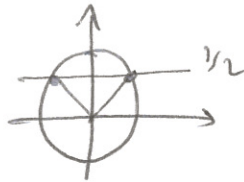


2) Again, we can solve the problem without drawing a graph, although it is always useful if you can sketch it.

points of intersection: $6 \sin \theta = 2 + 2 \sin \theta$

$$\rightarrow \sin \theta = \frac{1}{2} \rightarrow \theta = \frac{\pi}{6} + 2n\pi$$

$$\pi - \frac{\pi}{6} + 2n\pi$$



so $\theta = \frac{\pi}{6}, \frac{5}{6}\pi$ in $[0, 2\pi]$

Now we can determine the outer curve by plugging a test point in the interval (for ex $\pi/2$)

$$6 \sin \frac{\pi}{2} = 6$$

$$2 + 2 \sin \frac{\pi}{2} = 4$$

$$\frac{5}{6}\pi$$

$$\rightarrow \text{Area} = \int_{\frac{\pi}{6}}^{\frac{5}{6}\pi} \frac{1}{2} (6 \sin \theta)^2 - \frac{1}{2} (2 + 2 \sin \theta)^2 d\theta$$

$$= \frac{1}{2} \int_{\frac{\pi}{6}}^{\frac{5}{6}\pi} (36 \sin^2 \theta - 4 - 4 \sin^2 \theta - 8 \sin \theta) d\theta$$

$$= \int_{\frac{\pi}{6}}^{\frac{5}{6}\pi} (16 \sin^2 \theta - 2 - 4 \sin \theta) d\theta$$

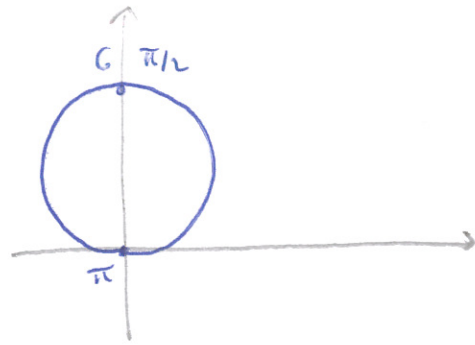
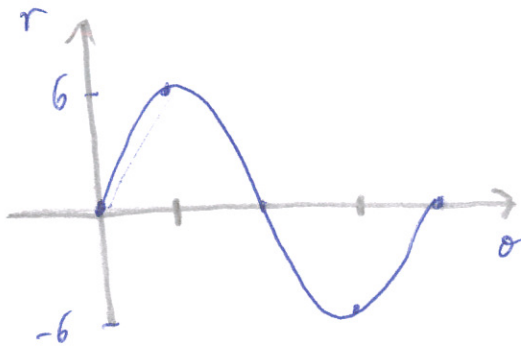
$$= \int_{\frac{\pi}{6}}^{\frac{5}{6}\pi} 8(1 - \cos(2\theta)) d\theta - 2 \left(\frac{5}{6}\pi - \frac{\pi}{6} \right) + \left[4 \cos \theta \right]_{\frac{\pi}{6}}^{\frac{5}{6}\pi}$$

$$= 8 \left(\frac{5}{6}\pi - \frac{\pi}{6} \right) - \left[4 \sin(2\theta) \right]_{\frac{\pi}{6}}^{\frac{5}{6}\pi} - 2 \cdot \frac{2}{3}\pi + 4 \cos \left(\frac{5}{6}\pi \right) - 4 \cos \left(\frac{\pi}{6} \right)$$

$$= 8 \cdot \frac{2}{3}\pi - 2 \cdot \frac{2}{3}\pi - 4 \sin \left(\frac{5}{3}\pi \right) + 4 \sin \left(\frac{\pi}{3} \right) + 4 \left(\frac{\sqrt{3}}{2} \right) - 4 \cdot \frac{\sqrt{3}}{2}$$

$$= 6 - \frac{2}{3}\pi + 4 \frac{\sqrt{3}}{2} + 4 \frac{\sqrt{3}}{2} - 4 \frac{\sqrt{3}}{2} - 4 \frac{\sqrt{3}}{2} = 4\pi$$

$$r = 6 \sin \theta$$



$$r = 2 + 2 \sin \theta$$

